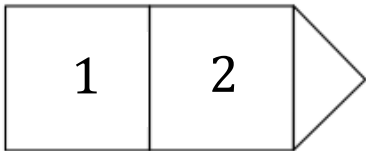
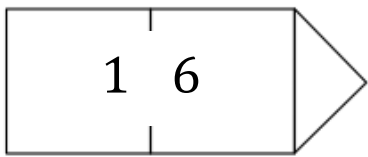


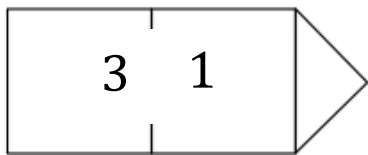
Read the numbers and write down how many tens and ones are in each number.



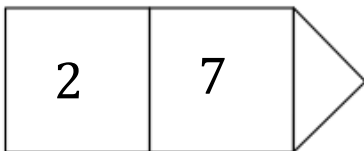
tens and  units.



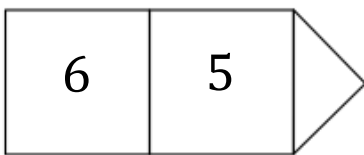
tens and  units.



tens and  units.



tens and  units.



tens and  units.