

Use these cards to make number sentences. How many can you find?



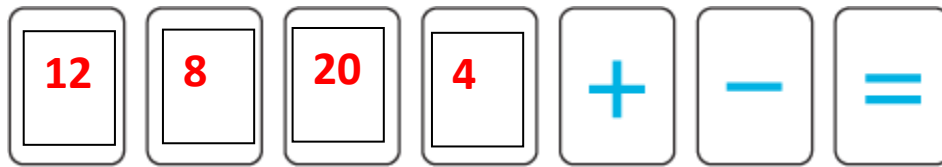
For example:




In each calculation you must only use a card once, but you can re-use them in your next calculation if you want to.

Can you find all the possible ways to use the cards?

Use these cards to make number sentences. How many can you find?



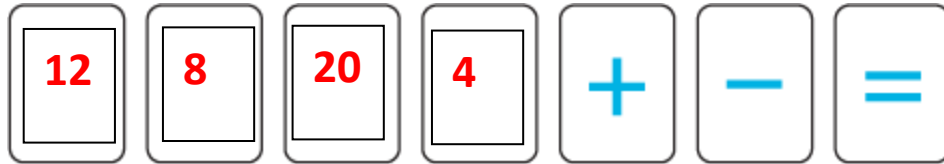
For example:




In each calculation you must only use a card once, but you can re-use them in your next calculation if you want to.

Can you find all the possible ways to use the cards?

Use these cards to make number sentences. How many can you find?



For example:



In each calculation you must only use a card once, but you can re-use them in your next calculation if you want to.

Can you find all the possible ways to use the cards?

Did you find any patterns or special number friends?
Explain your thinking.